



- 
- Do you like dancing?
 - Do you enjoy going to the shop?
 - Do you hate singing?
 - When did you begin reading books?
 - Do you love or hate going to school?
 - Do you like learning English?



TIME & CLOCKS







face

hour

past

half-halves

hand

minute

second

watch

quarter

WE USE TO LEARN THE TIME...



A CLOCK



AN ALARM CLOCK



A WATCH



INTERESTING TO KNOW:

B

C

A



A FACE

HANDS



- 1) Does a clock have two faces?
- 2) How many hands does a clock usually have?
- 3) What does the long hand show?
- 4) What does the short hand show?
- 5) Can a clock show seconds?
- 6) How many hours does a day have?
- 7) How many minutes does an hour have?
- 8) How many seconds does a minute have?



ASKING AND TELLING THE TIME:

B


C

A



-WHAT TIME IS IT?
-IT'S 5 O'CLOCK.





Excuse me. Can
you tell me the
time, please?



Yes, of course. It's
six o'clock.



I'm sorry. I don't know.
I don't have a watch.

Thank you.

WHAT TIME IS IT?



O'CLOCK

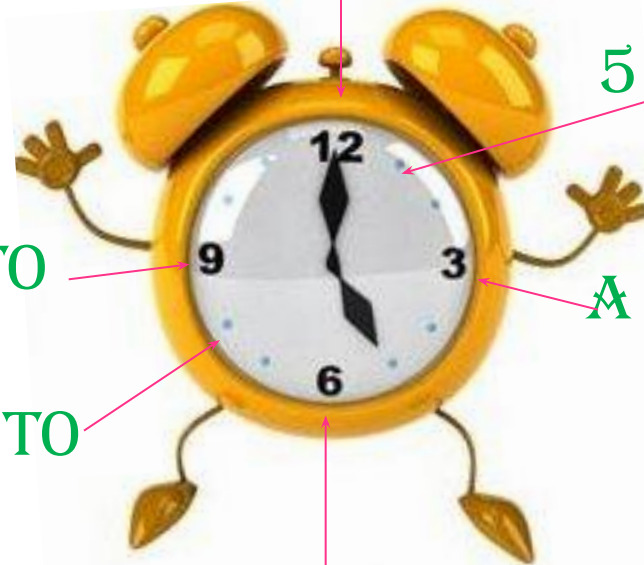
5 MINUTES PAST

A QUARTER TO

A QUARTER PAST

20 MINUTES TO

A HALF





a *It's twenty past three.*



b _____



c _____



d _____



e _____



f _____



g _____



h _____



i _____



j _____



k _____



l _____

MATCH THE TIME:



1. It's three o'clock.	A 12.35
2. It's a quarter past eight.	B 8.05
3. It's ten thirty.	C 11.25
4. It's five to five.	D 1.58
5. It's nine twenty-five.	E 8.15
6. It's twenty-five to eleven.	F 4.55
7. It's two to two.	G 10.35
8. It's eleven twenty-five.	H 9.25
9. It's five past eight.	I 10.30
10. It's twelve thirty-five.	J 3.00



WHAT TIME IS IT? WRITE IN NUMBERS:

- 1. It's seven thirty -
- 2. It's five to ten -
- 3. It's one to one -
- 4. It's a quarter past three -
- 5. It's eight forty-five -
- 6. It's ten past eleven-.....
- 7. It's a quarter to three-
- 8. It's four thirty-five -
- 9. It's twelve o'clock -
- 10. It's two fifty-five. -



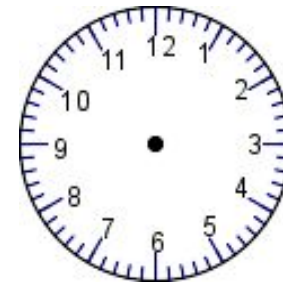
WHAT'S THE TIME? DRAW:



It's eleven o'clock.



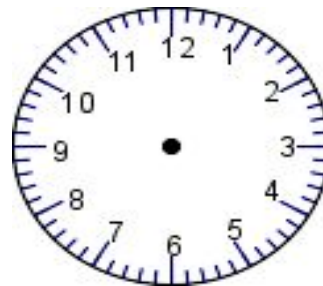
It's twenty to nine.



It's a quarter past six.



It's three thirty.



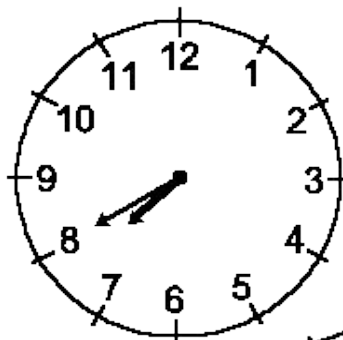
It's ten to seven.



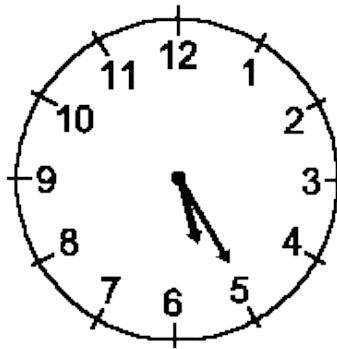
LOOK AT THE CLOCKS AND WRITE THE TIME:



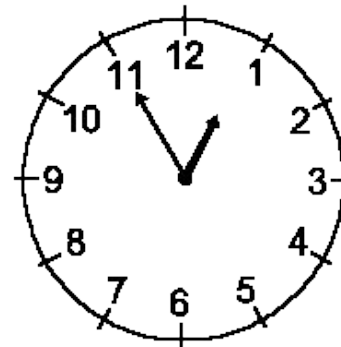
1.



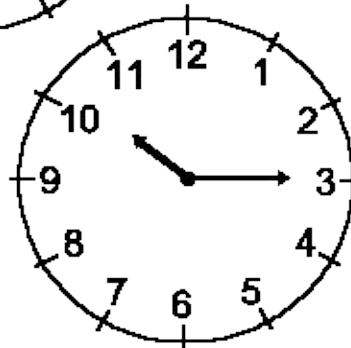
2.



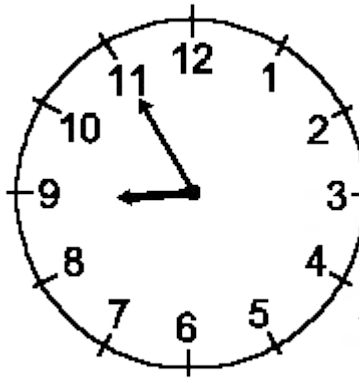
3.



5.



4.





The Kremlin Clock is on the Spassky Tower in Moscow. We listen to the Spassky tower clock when it strikes the hours.

This clock is as famous in this country as Big Ben is in England. Every night when it strikes twelve we hear it on the radio.

- Tourists in London always want to visit Westminster and see Big Ben. They want to see the clock in its tower and to hear the bells. Big Ben is one of the most famous clocks in the world. Big Ben is really a bell. You hear it every hour. It is a big bell. It weighs 13,720 kilograms.
- It has a deep tone and you can hear it on the radio: "This is the BBC. The time is six o'clock." And then you hear the deep boom of Big Ben six times.





ЧАСЫ ГРИНВИЧ

Где: Королевская обсерватория в Гринвиче, Лондон, Великобритания.

Год создания: 1852.

Размер: Диаметр часов, сделанных из металла и стекла, всего 92 сантиметра.

Факт: 24-часовые часы Гринвич, которые также носят названия Главные электрочасы, Часы Шеперда (по имени их создателя Чарльза Шеперда) и Часы Королевской обсерватории, стали первыми часами, наглядно демонстрировавшими время, с которого ведут отсчет во всем мире. Они расположены на воротах обсерватории.



**THE SHEPHERD
24 HOUR GATE CLOCK**

This clock was the first of its kind in the world. It was invented by John Shepherd, a watchmaker from London, in 1847. It was the first clock to show the time of day and night, and it was the first clock to be used in a public place.

THE TIME BALL

The time ball was a large ball that was raised to the top of a tower at the end of each day. It was used to mark the end of the day and the beginning of the next day. It was the first time that the day was marked by a ball.



GEORGE'S BENCH MARK

This bench mark was used to measure the height of the clock tower. It was the first bench mark to be used in London.

**PUBLIC STANDARD
ON LONDON**

This clock was the first public standard clock in London. It was used to mark the time of day and night, and it was the first clock to be used in a public place.

An aerial night view of a city, likely Paris, showing a prominent illuminated archway (the Arc de Triomphe) in the foreground. The city lights are visible in the background.

Hometask:

Project “Now you know that Big Ben is one of the national symbols of Great Britain. Find out some more facts about Big Ben and its history. Choose some pictures and photos of Big Ben”.

SELF-CHECK:

- Did you like the topic «Time & clocks» ?
- What did you like?
- What was the most difficult?



GREAT!
YOU DID WELL!

B

C

A

