



**What time
is it?**

Click to start



What time is it?



It's three o'clock.

It's five o'clock.

It's nine o'clock.

next

What time is it?



It's ten past ten.

It's ten past two.

It's ten to two.

next

What time is it?



It's half past nine.

It's half past eight.

It's half to nine.

next

What time is it?




It's twenty past eleven.

It's twenty past ten.

It's twenty to eleven.

next

What time is it?



It's quarter to nine.

It's quarter past nine.

It's quarter to three.

next

What time is it?



It's five to nine.

It's quarter to eleven.

It's five past nine.

The end