

Перед вами будут появляться примеры, которые необходимо вычислять последовательно, совершая действие с последним полученным вами ответом. Каждый продолжительный пример будет разделен пустым серым экраном.


Назвать окончательный ответ нужно будет только в конце продолжительного вычисления, когда на слайде появится знак «равно» и вопрос – «=?».

Перед вами будут появляться примеры, которые необходимо вычислять последовательно, совершая действие с последним полученным вами ответом. Каждый продолжительный пример будет разделен пустым серым экраном.

Назвать окончательный ответ нужно будет только в конце продолжительного вычисления, когда на слайде появится знак «равно» и вопрос – «=?».




618+5



$$618+5$$




-13



-13




/2



/2




-210



-210




+7



+7




/2



/2




-27



-27



$$*3 = ?$$




$$*3 = ?$$








$$6 * 9$$



$$6 * 9$$




-6



-6




-13



-13




*9



*9



-28



-28



17



17



+29



+29



-17



-17



*2=?



*2=?







722-7



722-7



/5



/5



+14



+14



-58



-58



/3



/3



*4



*4



-117



-117



$$+17=?$$



$$+17=?$$







$$33+58$$



$$33+58$$



+63



+63



*2



*2



-289



-289



*5



*5



+7



+7



-68



-68




$$+39=?$$



$$+39=?$$







49+91



$$49+91$$



*3



*3



-67



-67



-92



-92



/3



/3



+16



+16



*2



*2



$$-67 = ?$$



$$-67 = ?$$







30+44



30+44



*2



*2



-16



-16



+19



+19



-78



-78



-14



-14



*3



*3




$$+4=?$$



$$+4=?$$







93/3



93/3



+116



+116



-9



-9



/2



/2



+259



+259



/2



/2



-17



-17



$$+9=?$$



$$+9=?$$







61-6



61-6



/5



/5



+157



+157



-99



-99



*2



*2



+63



+63



-13



-13



$$/4=?$$



$$/4=?$$







112-63



112-63



*3



*3



+16



+16



-19



-19



/3



/3



*4



*4



+67



+67




-116=?



$$-116 = ?$$







115-12



115-12



*4



*4



+18



+18



/5



/5



+39



+39



-98



-98




*7=?



*7=?








800/5




800/5



+170



+170




*4






*4



-321




-321



+5




+5



/4



/4





- 1 1 6 = ?



- 116 = ?








88*4




88*4



-52




-52



12




12



+99




+99



- 117




-117



-27




-27



*3





***3**



$$+23=?$$








119+7




119+7



16




16



+65




+65



12




12



+113




+113



-99




-99



*8




*8





-3 | | = ?



$$-3 \mid \mid = ?$$








$$7 * 13$$




$$7 * 13$$



+94




+94



-66




-66



+14




+14



17




17




*6



*6






- ||






- ||





$$+38=?$$



$$+38=?$$








77+66




$$77+66$$



-68




-68



*9




*9



-499




-499



+15




+15



-80



-80



/3





/3



$$+33=?$$








67-19




67-19



*5




*5



-75




-75



/3




/3



+68




+68



*3




***3**



19





19



$$-27 = ?$$








201-16




201-16



/5




/5



+42




+42



*3




***3**



-38




-38



+2




+2





/3=?



$$/3=?$$








9*12




$9 * 12$



-66




-66



12




12



+79




+79



-67




-67



*5





*5



-77=?








877-9




877-9



12




12



-311




-311



*2




$*2$



+3




+3



/3





/3



$$+29=?$$








5*9




$$5 * 9$$



+19




+19



12




12



+99




+99



-68




-68



+41



+41



$$-49 = ?$$



