



МАТЕМАТИКА В ПРЕДЕЛАХ 10

Посчитай, сколько ромашек



4

6

7

9





Сравни



?




<

=


>







-




= ?

1

3

5

7





THE
Tigger
MOVIE

©2000 WALT DISNEY PICTURES

www.charlotte.com/315160/MOVIES



+




2

5

7

9







THE
Tigger
MOVIE

©2000 WALT DISNEY PICTURES

www.charlotte.com/315160/MOVIES/