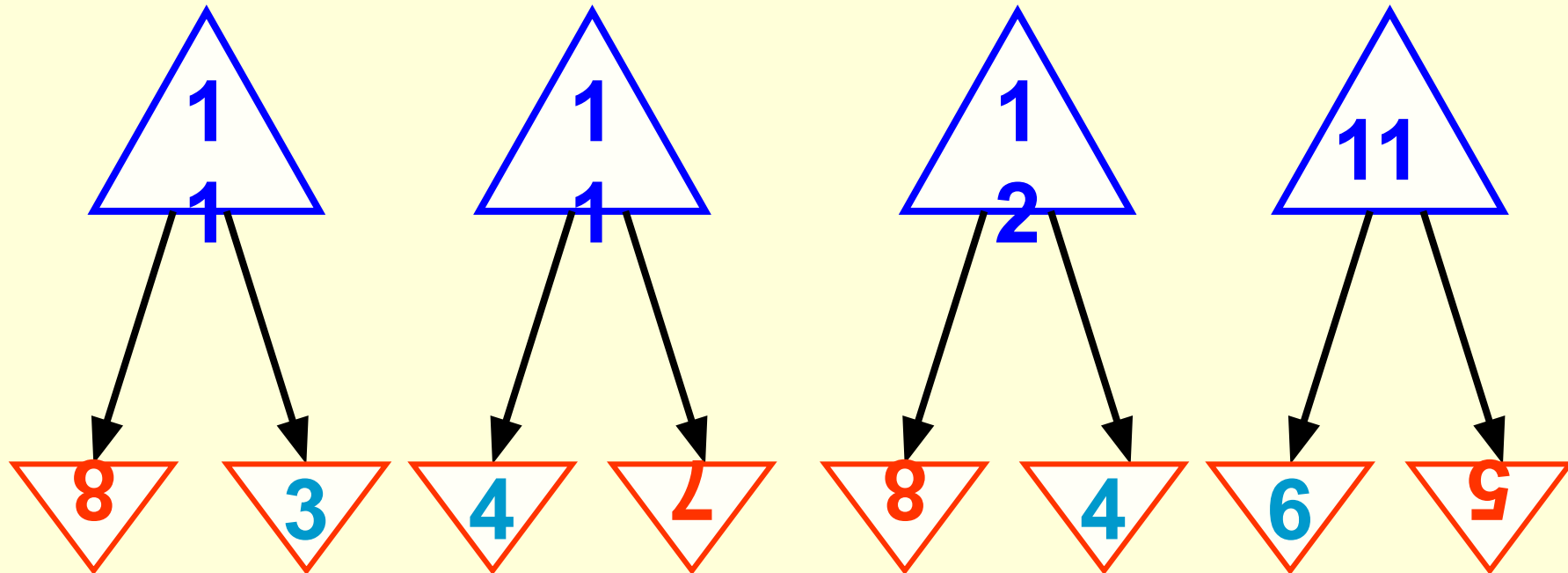



**Гагарин Ю.А.**


# Занимательная рамка.

<b>3</b>	<b>2</b>	<b>5</b>
<b>4</b>	<b>10</b>	<b>1</b>
<b>3</b>	<b>3</b>	<b>4</b>





*В нуть!*



A futuristic landscape with a large planet in the sky and a river in the foreground. The scene is set in a dark, starry space. In the upper left, a large, dark planet with a thin atmosphere is visible. The foreground shows a rocky, uneven terrain with a winding river or stream. The sky is filled with numerous stars, and a bright light source is visible on the right side, creating a glow over the landscape.

# *Планета новых знаний*

Сосчитай-ка!



# Планета задач



© 2012 SWAROOP R. All rights reserved. This is a wallpaper version. Contains watermarks.



Берез - 10 с.

Ёлочек - ? на 4 меньше

$$10 - 4 = 6 \text{ (ёл.)}$$

Ответ: 6 ёлочек.



A surreal landscape featuring a planet with rings, resembling Saturn, in the sky. The foreground shows a range of mountains with a blueish tint, suggesting a cold or alien environment. The sky is filled with soft, white clouds. The overall scene is a composite of different elements, creating a dreamlike atmosphere.


*Сам решаЙ-ка!*



$$8 + 3 = 11 \quad 7 + 5 = 12$$

$$9 + 4 - 3 = 10 \quad 6 + 6 - 12 = 0$$

$$16 - 10 + 5 = 11 \quad 10 - 2 + 4 = 12$$



1. Выбери пример с ответом 14.

$10+3$

$9+4$

$9+5$

2. Выбери пример с ответом 11.

$9+3$

$6+5$

$7+6$

3. К числу 7 надо прибавить 6. Как разложить число 6?

$3+3$

$1+5$

$2+4$

4. Среди данных чисел найди наибольшее.

15

11

17

13

5. Выбери число, которое меньше 16.

19

17

13

20

# МОЛОДЕЦ!



# НЕВЕРНО





*Домой!*



earth