



# *Násobíme a dělíme s Mimoňmi*



Ahoj, deti! Teším sa, ako budeme spoločne počítat'. Označte správny výsledok a choďte na ďalšiu stránku.






$$9 \cdot 2 =$$




- |    |    |    |    |
|----|----|----|----|
| 16 | 17 | 18 | 19 |
| ✗  | ✗  | ✓  | ✗  |



$$28 : 4 =$$




7	8	9	10
✓	✗	✗	✗



$$4 . 9 =$$




- |    |    |    |    |
|----|----|----|----|
| 35 | 36 | 37 | 38 |
| ✗  | ✓  | ✗  | ✗  |



$$8 \cdot 4 =$$




- |    |    |    |    |
|----|----|----|----|
| 33 | 32 | 34 | 35 |
| ✗  | ✓  | ✗  | ✗  |



$$54 : 9 =$$



4	5	6	7
✗	✗	✓	✗




$$81 : 9 =$$



- |   |   |   |   |
|---|---|---|---|
| 9 | 8 | 7 | 5 |
| ✓ | ✗ | ✗ | ✗ |






$$27 : 9 =$$




- |   |   |   |   |
|---|---|---|---|
| 5 | 4 | 3 | 2 |
| ✗ | ✗ | ✓ | ✗ |



$$5 . 8 =$$




- |    |    |    |    |
|----|----|----|----|
| 40 | 41 | 42 | 43 |
| ✓  | ✗  | ✗  | ✗  |



$$30 : 10 =$$




4	3	5	6
✗	✓	✗	✗



$$45 : 9 =$$




- |   |   |   |   |
|---|---|---|---|
| 5 | 6 | 7 | 8 |
| ✓ | ✗ | ✗ | ✗ |



$$12 : 6 =$$




- |   |   |   |   |
|---|---|---|---|
| 1 | 2 | 3 | 4 |
| ✗ | ✓ | ✗ | ✗ |



$$5 . 7 =$$




- |           |           |           |           |
|-----------|-----------|-----------|-----------|
| <b>37</b> | <b>36</b> | <b>35</b> | <b>34</b> |
|           |           |           |           |



$$40 : 8 =$$



- |   |   |   |   |
|---|---|---|---|
| 5 | 6 | 7 | 8 |
| ✓ | ✗ | ✗ | ✗ |




$$7 . 6 =$$



- |    |    |    |    |
|----|----|----|----|
| 43 | 42 | 44 | 45 |
| ✗  | ✓  | ✗  | ✗  |






$$48 : 8 =$$




4	5	6	7
✗	✗	✓	✗



$$63 : 7 =$$




- |   |   |   |   |
|---|---|---|---|
| 9 | 8 | 7 | 5 |
| ✓ | ✗ | ✗ | ✗ |



$$7 \cdot 4 =$$



- |    |    |    |    |
|----|----|----|----|
| 26 | 27 | 28 | 29 |
| ✗  | ✗  | ✓  | ✗  |




$$72 : 8 =$$




- |   |   |   |   |
|---|---|---|---|
| 9 | 8 | 7 | 5 |
| ✓ | ✗ | ✗ | ✗ |

**Ktoré číslo chýba v  
medzi násobkami v  
číslnom rade??**







Ste veľmi  
šikovné deti,  
dovidenia.

